




MINISTRY OF EDUCATION
PRIMARY ENGAGEMENT PROGRAMME
GRADE ONE WORKSHEET
SUBJECT: MATHEMATICS
LESSON: 3 WEEK 6
TOPIC: PLANE SHAPES

Name: _____

TIP/ FACT: A plane shape is a flat shape.

PRACTICE EXAMPLE:



circle

ON YOUR OWN:

Write the name of the plane shape on the line below it.

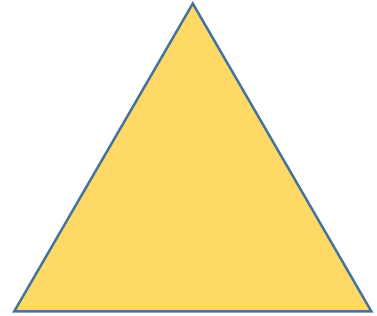
square


rectangle

triangle

pentagon









HOMWORK:

Which shape on the right is the same as the shape on the left?
Circle it.

